

Math 247: Sample Means of Random Samples (Section 9.1)

Suppose a medical researcher wanted to find out about how air pollution is related to children's health; specifically, she wants to look at lung health and development.

Could she design an experiment to find out whether pollution significantly impacts children's lungs? Why or why not?

Since setting up her study as an experiment isn't ethical, she'll have to do an observational study. She would need to gather data from a sample of kids in areas with high pollution and compare the results to either known values (One Sample) or to the values obtained from a sample of kids who live in low pollution areas (Two Samples).

She'll have to determine what she wants to measure on each of the kids in the sample that would tell her about lung health and development.

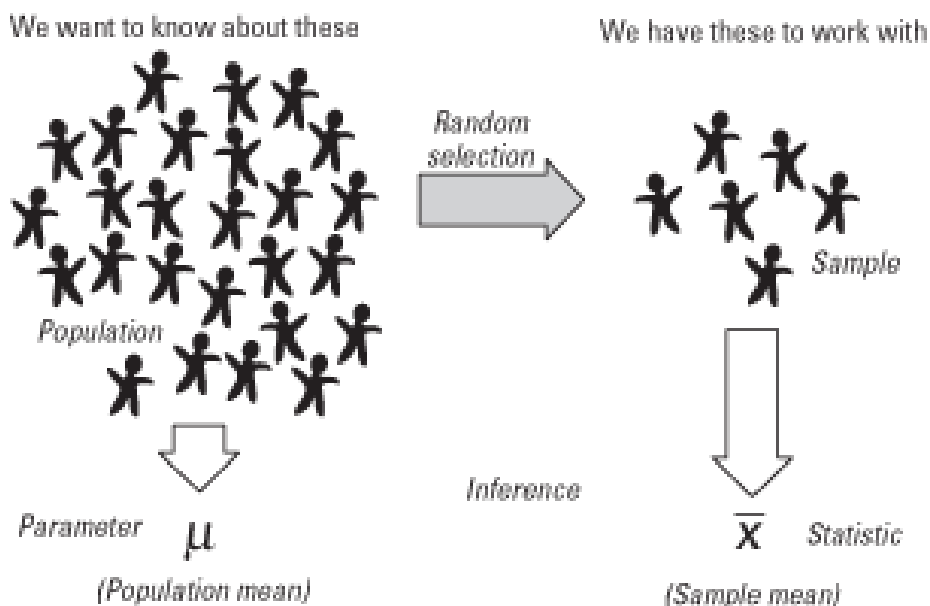
One of the measurements used to determine the health of a person's lungs is the amount of air a person can exhale under force in one second. This is called the "forced expiratory volume in one second". It's measured in liters (like soda bottles) and is abbreviated FEV₁.

Is FEV₁ a qualitative or quantitative variable? _____

Dealing with **quantitative** research questions: We can measure some value (the Variable of Interest) for each subject in a sample then combine those values into a **sample mean**.

This will tell us about what's going on for the subjects in the sample **ON AVERAGE**.

Next, we'll want to find out what might be true of the Population of Interest, again, **ON AVERAGE**, based on what's true **ON AVERAGE** for our sample.



Air Pollution and Children's Health. Previous studies have established that the mean FEV_1 for all 10-year-old boys is 2.1 liters and that the population standard deviation is 0.3 liters. A random sample of 100 10-year-old boys who live in a community with high levels of ozone pollution is found to have a mean FEV_1 of 1.95 liters. Does this data show there is a significant* decrease in lung function in children living in high pollution areas? (*More on types of significance later!)

In the problem above, write down and label of all the quantities mentioned. Use the correct notation for each and state whether it is a statistic or a parameter.

How will we determine statistical significance? We need to have a basis to judge how far away a sample mean is from the population mean and how unlikely that difference is just due to. . .

How have we measured how “far away” values are in the past?

We'll have to investigate this issue before we can proceed with the Air Pollution/Children's Health example (more later!)

First, let's look at the concept of a sampling distribution using simulations

Example: Imagine you had the all the data on how many hours adults sleep per night. What do you think the shape of the distribution of sleep hours would be; i.e., left skewed, right skewed, or symmetric?

Sketch your idea here:

Using the Sleep Hours data in the Rossman/Chance Applet for Sampling Distribution of the mean, check the shape of the population distribution of Sleep Hours. The shape is _____

Now describe shape you see for the sampling distribution of sample means for each of the following and note what happens to the spread of the sampling distribution.

n = 3

n = 10

n = 25

Observations about shape:

Observations about spread:

Summary:

Shape: If the Variable of Interest (quantitative) in the population has a symmetric distribution then the sampling distribution of the sample means will also be approximately symmetric.

Spread: The spread of the Sampling Distribution of the Mean is called the Standard Error, SE.

- The Standard Error gets smaller as the sample size increases

- The Standard Error is given by the formula $SE = \frac{\sigma}{\sqrt{n}}$

[Bootstrapping](#) or [Population model](#) or
 Paste population data or select from list:

ID	sleep
1	6.50
2	6
3	6
4	6.75
5	9
6	7.75
7	6.50
8	8.75
9	7.75

- Pop 1
 - Pop 2
 - Pop 3
 - Gettysburg
 - Pennies
 - Change
 - Stars
- Variable:

Population size: 18000

- x1
- x4
- x40

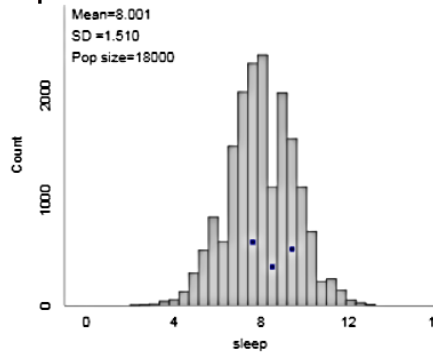
Show Sampling Options:

Number of samples:

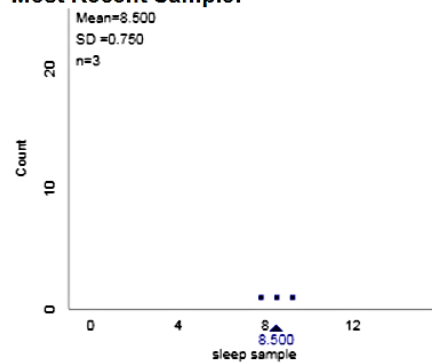
Sample size:

ID	sleep
2970	9.25
12843	8.50
409	7.75

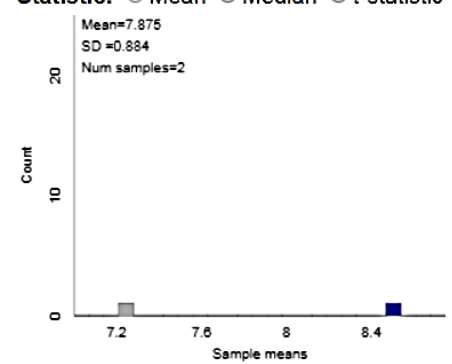
Population data:



Most Recent Sample:



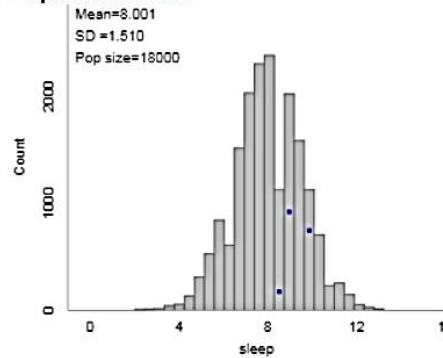
Statistic: Mean Median t-statistic



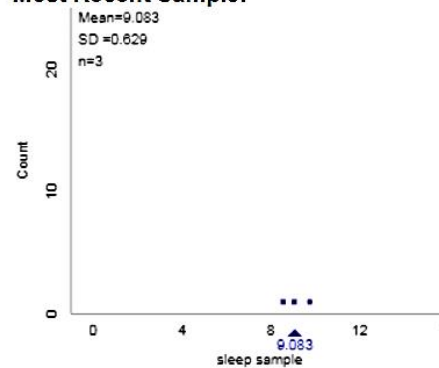
Population size: 18000

- x1
- x4
- x40

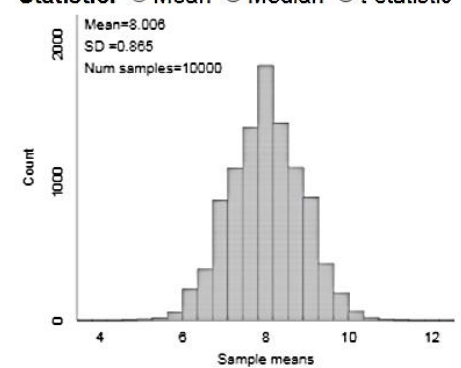
Population data:



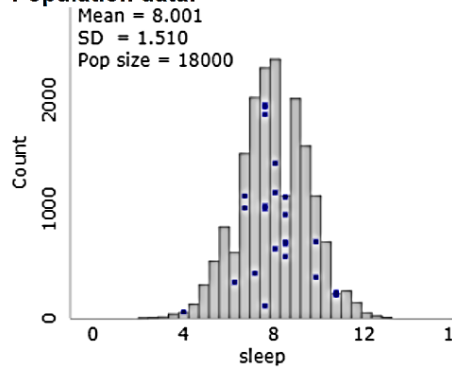
Most Recent Sample:



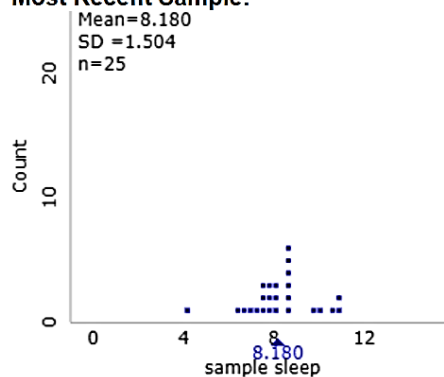
Statistic: Mean Median t-statistic



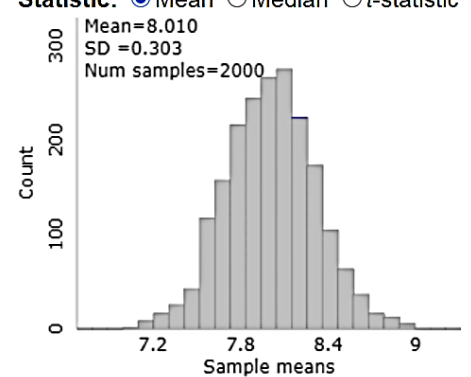
Population data:



Most Recent Sample:



Statistic: Mean Median t-statistic



Example: Imagine all the pennies currently in circulation (the pennies that people and banks and stores and such actually have).

If you knew all the ages of these pennies (had this HUGE census data set), what would the shape of the distribution of ages be; i.e., left skewed, right skewed, or symmetric?

Sketch your idea here:

Using the Penny Age data in the Rossman/Chance Applet for Sampling Distribution of the mean, check the shape of the population distribution of Penny Ages. The shape is _____

Now describe shape you see for the sampling distribution of sample means for each of the following and note what happens to the spread of the sampling distribution.

n = 3

n = 10

n = 25

Observations about shape:

Observations about spread:

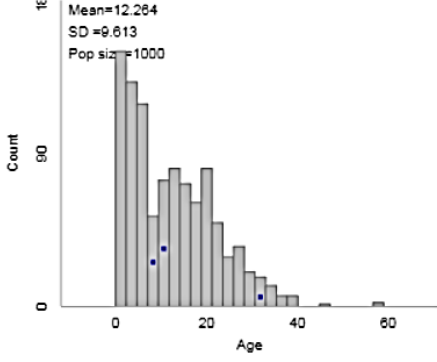
Summary:

Shape: If the Variable of Interest (quantitative) in the population does NOT have a symmetric distribution then the sampling distribution of the sample means will not be symmetric unless the sample size is LARGE ($n \geq 25$)

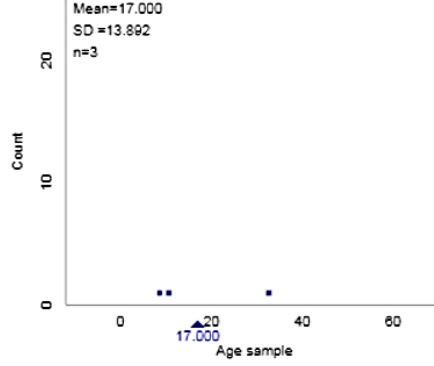
Spread: The spread of the Sampling Distribution of the Mean is called the Standard Error, SE.

- The Standard Error gets smaller as the sample size increases
- The Standard Error is given by the formula $SE = \frac{\sigma}{\sqrt{n}}$

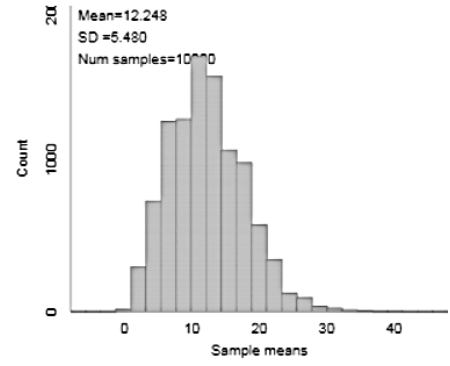
Population data:



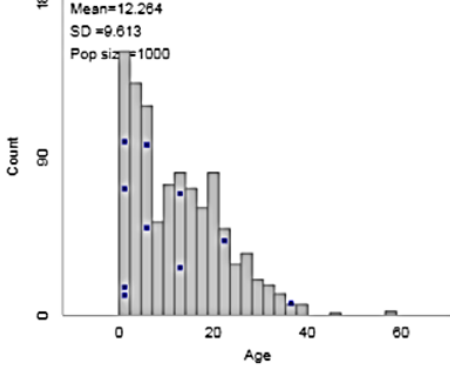
Most Recent Sample:



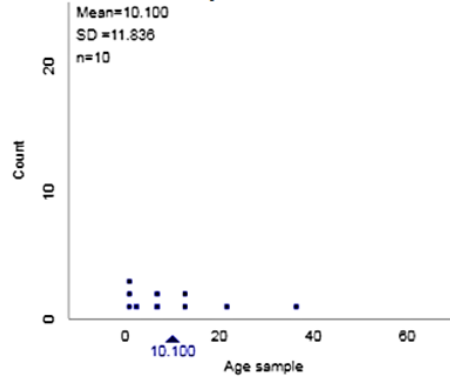
Statistic: Mean Median f-statistic



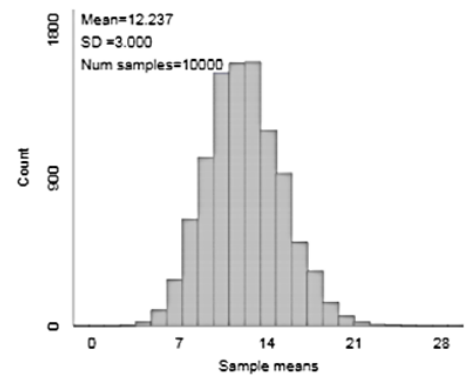
Population data:



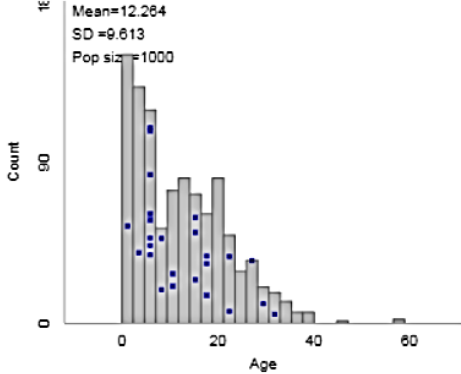
Most Recent Sample:



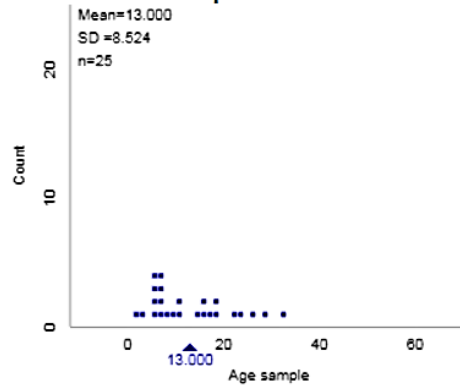
Statistic: Mean Median f-statistic



Population data:



Most Recent Sample:



Statistic: Mean Median f-statistic

